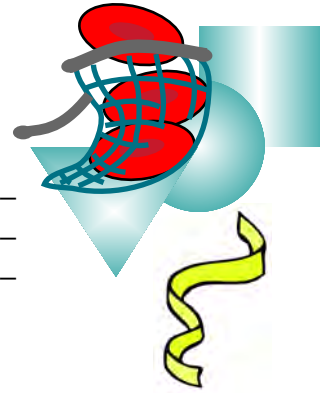


# Born of Blood: Fun Puns

## Student Data Page 3C - Part 3



1. What did the crepe paper streamers represent in this activity?

---



---



---

2. Why were there three colors of crepe paper streamers in the activity?

---



---



---

3. What did the marks on the crepe paper streamers represent?

---



---



---

4. Why do you think the runner in the activity was named *Random* Runner?

---



---



---

5. What is the purpose of a Punnett Square?

---



---



---

6. Why weren't the Likli' Hoods called children in this activity?

---



---



---

7. Complete the following table by looking at the *Chromo-Cross Cards* in your group.

<i>Gene Combinations for Type A Blood</i>	<i>Gene Combinations for Type B Blood</i>	<i>Gene Combinations for Type O Blood</i>	<i>Gene Combinations for Type AB Blood</i>



LESSON 3  
ACTIVITY 3C

8. Complete the following Punnett Squares:

- a. What are the possible blood types that might result in the offspring of a Mom with Type A blood because she has two A genes and a Dad with type B blood because he has a B gene and an O gene?

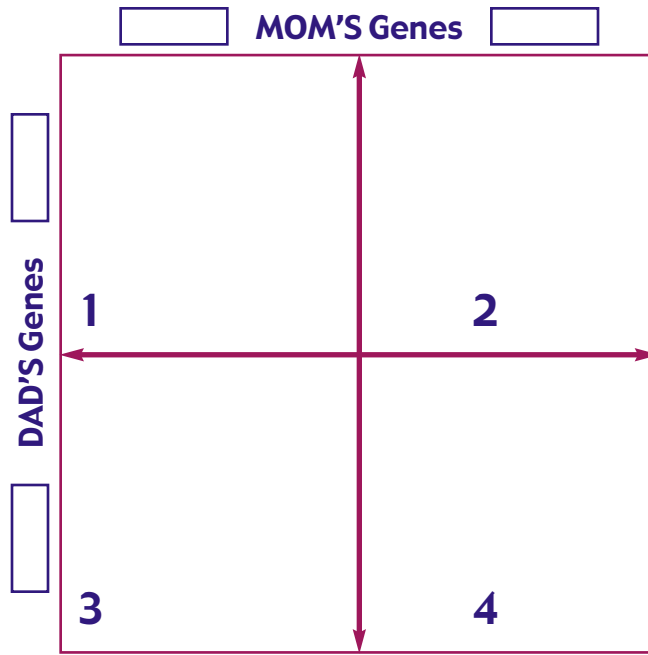

---



---



---

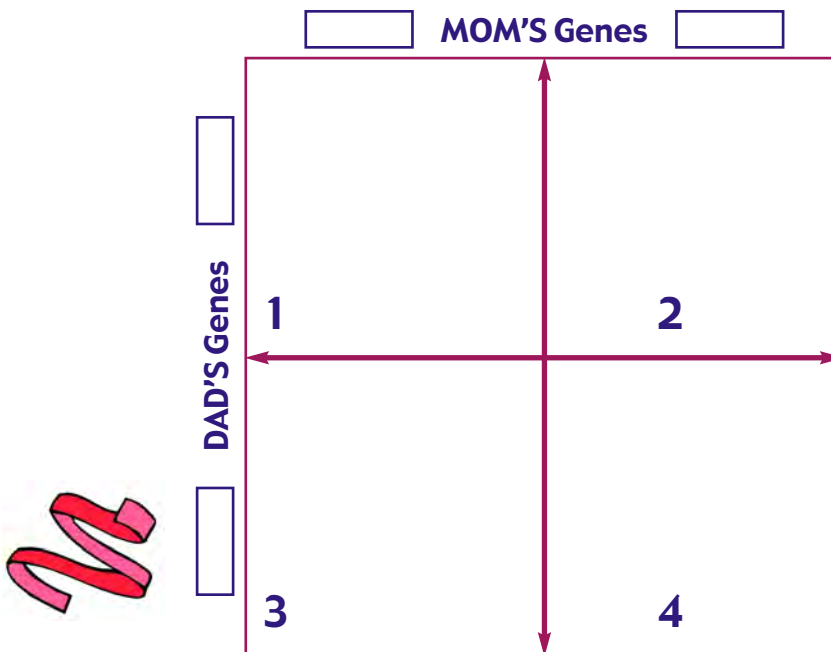


- b. What are the possible blood types that might result in the offspring of a Mom with Type AB blood because she has an A gene and a B gene and a Dad with type O blood because he has two O genes?

---



---



LESSON 3  
ACTIVITY 3C

CAST YOUR NET: ADVENTURES WITH BLOOD

c. What are the possible blood types that might result in the offspring of a Mom with Type B blood because she has two B genes and a Dad with type A blood because he has a A gene and an O gene?

---



---



---

